

THE UNITED REPUBLIC OF TANZANIA

PRESIDENT'S OFFICE- RALG

PRIMARY EDUCATION SERVICES NETWORKING ORGANIZATION (PESNO)



TEL: 0713- 526533

0767- 526533

GRADE III PESNO MOCK EXAMINATION – 2020

SUBJECT: MATHEMATICS [02]

DATE: 30TH NOVEMBER, 2020

TIME: 1 HR 30 MIN

CANDIDATE'S NAME: _____

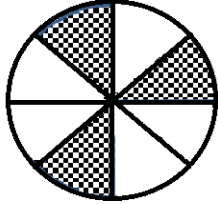
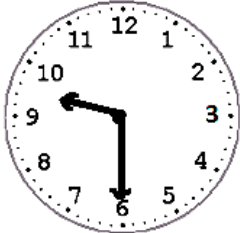
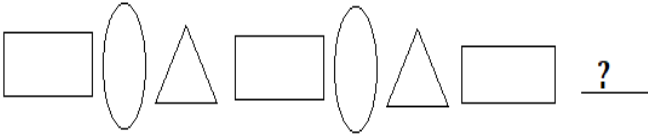
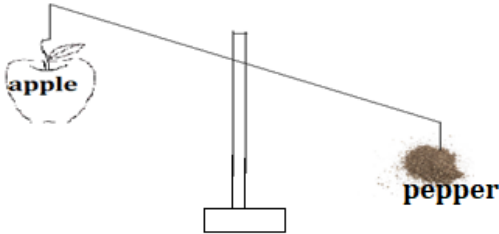
SCHOOL: _____

DISTRICT: _____ **REGION** _____


INSTRUCTIONS:

1. Answer all questions as per instructions in each section.
2. Observe neatness in your workings.
3. This paper has 5 questions in 4 printed pages.

NO.	QUESTION	WORKING SPACE	ANSWER
1	i. Write nine thousand and twenty five in numerals		
	ii. Which digit has small value in 6938		
	iii. Write $9+70+600+4000$ in short form		
	iv. What is the place value of the underlined digit in <u>4</u> 098		
	v. A school has 948 pupils. Write the number of pupils in words		
2	i. Arrange the following numbers in descending order 4664,4466,4646		
	ii. Fill in the missing number 80,100,120 ___ 160		
	iii. If you arrange 1511, 1115, 1151 in ascending order, what will be the second number?		
	iv. Write the biggest number just before 5000		
	v. Write the following as one number, 4 thousands, 8 ones, 9 hundreds		
3	i. $467+5823=$		
	ii. $8263-957=$		
	iii. $76\times 4=$		

	<p>iv. How many notes of sh. 2000 are there in a 10000 shillings note?</p>		
	<p>v. What fraction is NOT shaded</p> 		
4	<p>i. Write the time shown on the clock face below</p> 		
	<p>ii. Which of the following devices is used to measure the length? (Spring balance, tape measure, measuring cylinder)</p>		
	<p>iii. Write the name of the next pattern in the pattern below</p> 		
	<p>iv. Which 3 dimensional shape looks like a birthday hat?</p>		
	<p>v. Which one is heavier an apple or pepper</p> 		

5. Class three pupils were asked their favorite flavored ice-cream and their answers are recorded in the pictogram below



NO.	QUESTION	WORKING SPACE	ANSWER
i.	Which flavour was the least favorite		
ii.	How many pupils preferred chocolate ice-cream?		
iii.	Which flavour was preferred by 20 pupils?		
iv.	How many more pupils preferred strawberry than chocolate ice cream?		
v.	How many pupils are there in class three?		